




Convert the race finishing times to fill in the missing numbers.


10 k race finishing times		
Name	Hours and minutes	Minutes
Tom	1 hour and 15 mins	
Ella		70 minutes
Ben	1 hour and 35 mins	
Tina		65 minutes

500 metre race finishing times	
Name	Time in seconds
Sam	120 seconds
Lyn	95 seconds
Rob	110 seconds
Ava	100 seconds

Who ran the 500m race in two minutes?

Which two runners had a combined time of 3 minutes and 30 seconds?
_____ and _____

I think 

My teacher thinks 




Convert the race finishing times to fill in the missing numbers.

10 k race finishing times		
Name	Hours and minutes	Minutes
Tom	1 hour and 15 mins	
Ella		70 minutes
Ben	1 hour and 35 mins	
Tina		65 minutes

500 metre race finishing times	
Name	Time in seconds
Sam	120 seconds
Lyn	95 seconds
Rob	110 seconds
Ava	100 seconds

Who ran the 500m race in two minutes?

Which two runners had a combined time of 3 minutes and 30 seconds?
_____ and _____

I think 

My teacher thinks 