

Buying several




Write how much each set of toys costs.

1.



$$2 \times 41p = 82p$$


2.



3.




4.



5.



6.



How much change from £5 would you get for each set of toys?
Work out your answers on the back of this sheet.



I can pay for several of the same item and work out the change

