

How much?

Tick the most likely cost of each thing.

1. An umbrella

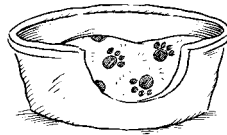


£5.99

56p

£341

2. A dog bed




77p

96p

£14.95

3. A microwave




£89

£1994

£4.80

4. A home theatre system




£14.11

£62

£1250

5. A new CD



15p

£8.49

£150.42

6. A coat



£35

82p

£8522

7. A brand new car




£9789

£59.95

£580.99

8. A house



£100

£4000

£130 000

9. Estimate the cost of three other items that cost more than £100.
Write your answers on the back of this sheet.



I can say how much things cost

