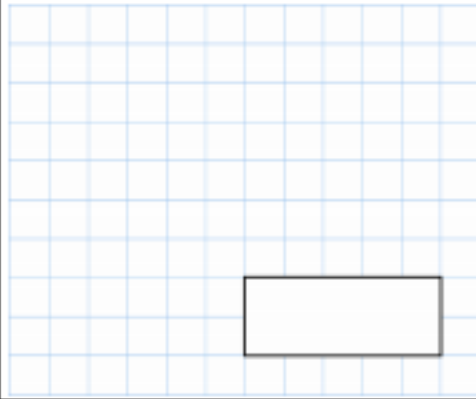


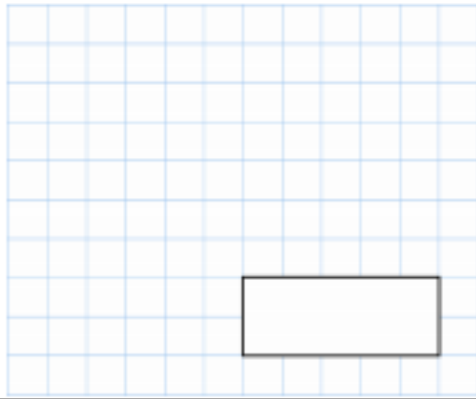


11th May

$$2,331 \div 37$$



$$37.5\% = \frac{\square}{\square}$$



How many dots are there in Pattern 15?



Pattern 1



Pattern 2



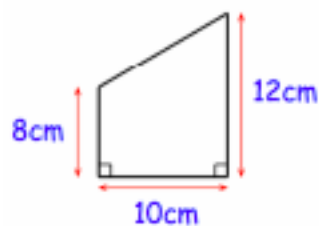
Pattern 3

Find the fraction halfway between

$$\frac{2}{3} \text{ and } \frac{4}{5}$$

This is the plan of a garden.  
On the plan, each 1 centimetre = 3 metres

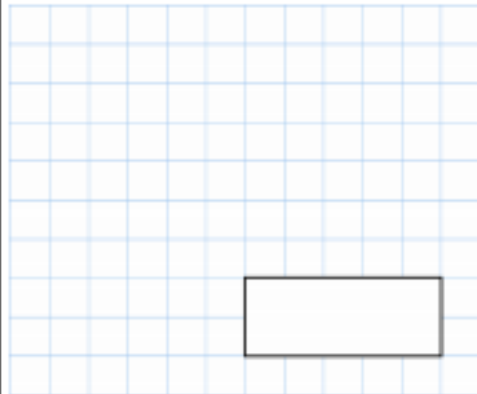
Find the area of the actual garden.



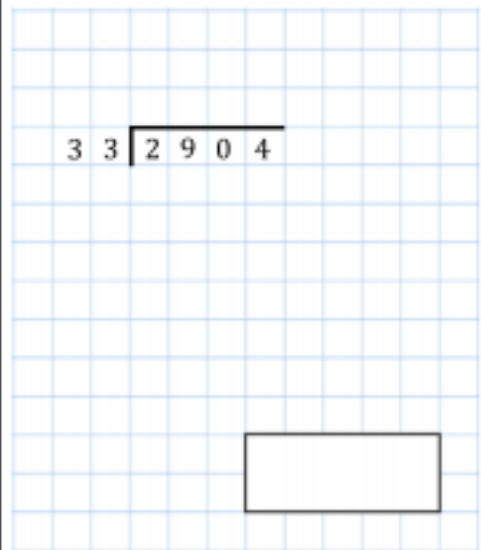


12th May

$$0.09 \times 28$$



$$33 \overline{) 2904}$$



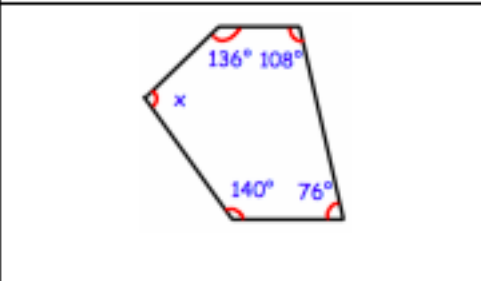
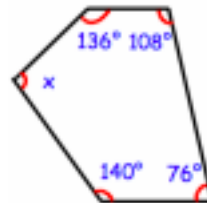
A theatre has 52 rows of seats.  
Each row has 19 seats.

Tickets cost £13 each.  
All tickets are sold for a show.

Estimate how much money is raised.



Find  $x$



Burt is making cupcakes  
He has made 20,000 cupcakes.  
Burt places the cupcakes in boxes of 16.

How many boxes can he fill?





**14th May**

$10.8 \div 30$

$2\frac{4}{5} - \frac{8}{9}$

Hannah is paid £280.

She spends 30% on her rent,  
45% on food and bills,  
and she saves the rest.

How much money does Hannah save?

Miss Taylor keeps chickens in this field.  
Each chicken needs  $3m^2$

What is the maximum number of chickens  
she can keep in the field?



Mr and Mrs Gould have 5 children.

The mean age of the children is 11 years.

Ben is 7 years old.  
Chloe is 5 years old.  
Max is 10 years old.  
Rose is 12 years old.

How old is the fifth child, Rebecca?

