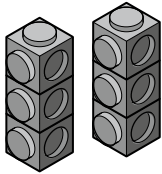


# Doubling and halving

These piles of cubes have been halved. How many are there altogether? How many in each pile?

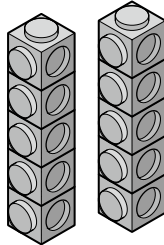
1.



Half:   3  

All:   6  

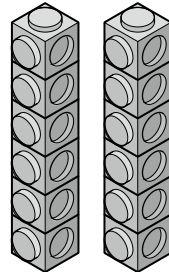
2.



Half:           

All:           

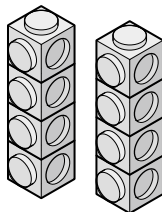
3.



Half:           

All:           


4.



Half:           

All:           

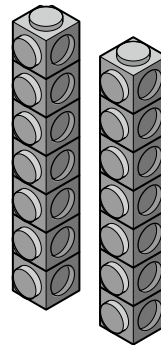
5.



Half:           

All:           


6.



Half:           

All:           

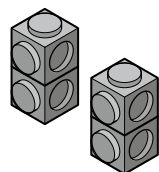
7.



Half:           

All:           


8.



Half:           

All:           

9.



Half:           

All:           



I can find half of a number of objects

