


Grams


Find one of each object. Write their weights in grams.



..... g



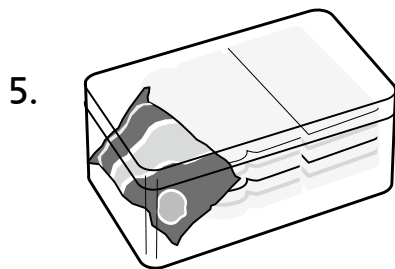
..... g




..... g



..... g



..... g



..... g



I can weigh objects in grams

Measure: Understanding and explaining

